

QUIZ NO: 580

TOPIC: ENVIRONMENTAL ENGINEERING

DATE: 14/04/2022

1. Per capita consumption will be higher if:

- [A] Pressure in distribution system will be more
- [B] Quality of water will be good
- [C] The living standard of people is higher
- [D] All the above are correct

Answer: D

2. Population forecasting method best suited when the growth rate is having decreasing trend and the city is heading towards saturation:

- [A] Arithmetic
- [B] Geometric
- [C] Graphical
- [D] Decreased rate of growth

Answer: D

3. The maximum yield from a tube well is generally above

- [A] 50 litres/sec
- [B] 30 litres/sec
- [C] 20 litres/sec
- [D] 10 litres/sec

Answer: A

4. Which of the following would contain water with maximum amount of turbidity?

- [A] Lakes
- [B] Wells
- [C] Rivers
- [D] Oceans

Answer: C

5. The water obtained from is generally known as underground water

- [A] Infiltration galleries
- [B] Spring
- [C] Rivers
- [D] Lake

Answer: B

To PURCHASE our COURSES

LIVE CLASSES

Assistant Engineer Standard 2022

Overseer Standard 2022

Assistant Engineer Courses	Overseer Courses
Assistant Engineer / Overseer Grade I	Overseer Grade I - Economical
Assistant Engineer – Kerala Pollution Control Board	Junior Instructor Surveyor
Assistant Engineer essential	Irrigation LSGD Overseer

Assistant Professor - Part A

GATE 2022 Civil Prerecorded

TEST SERIES (With detailed solution)

Online Test Series Combo	PCB Test Series
AE Test Series	SSC JE Subjectwise
OVERSEER Test Series	GATE 2022 Test Series
ISRO Test Series	Full length tests – GATE
SSC JE CIVIL Test Series	Topicwise tests for GATE
SSC JE Full Length Tests	Subjectwise Test series – GATE

e - BOOKS

HANDWRITTEN NOTES – e- book

e – Book for Civil Engineering INTERVIEWS

150 PYQ e - book

Mechanical Engineering e - Book

Assistant Engineer & Overseer Quick Reference e - Book

GATE e-Book

Civil Engineering MCQ – e Book

Overseer PYQ detailed – e Book

ASSISTANT PROFESSOR

ONLINE BUNDLE COURSE

Enroll Now 

We Believe In BALANCE!











Assistant Engineer

Pollution Control Board



- Pre-recorded classes
- Comprehensive test series
- E-book (Handwritten notes)
- Faculty support
- 25 Subjects
- Discussion Support

Connect with us

CLICK	 elearncivilianz@gmail.com	 Civilianz_official
	 9497 498 415	 Civil study Circle
	 civilianz	 Civilianz
	 Clubhouse	 WWW.CIVILIANZ.COM
	 Civilianz Blog	 Telegram Job Channel

for SAMPLE CLASSES

AE 

GATE 

Overseer 

CLICK 

6. A test used for determining the biological quality of drinking water is:

- [A] Acidity test
- [B] Coliform test
- [C] Iodine test
- [D] Vidal test

Answer: B

7. Zeolite process can lower hardness upto:

- [A] 0 mg/lit
- [B] 10 mg/lit
- [C] 50 mg/lit
- [D] 100 mg/lit

Answer: A

8. In water treatment, rapid gravity filters are adopted to remove:

- [A] Dissolved organic substances
- [B] Dissolved solids and gases
- [C] Floating solids and dissolved inorganic solids
- [D] Bacteria and colloidal solids

Answer: D

9. Aeration of water is done to remove:

- [A] Suspended impurities
- [B] Floating impurities
- [C] Dissolved salts
- [D] Dissolved gases

Answer: D

10. The layout of distribution system suitable for unplanned cities and irregularly flowing town is

- [A] Grid system
- [B] Circular system
- [C] Radial system
- [D] Dead end system

Answer: D

Join our social media platforms

